



Shapes and Space

1. Which shape is a rectangle?



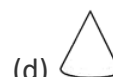
1. (c)

2. Which of the following is a square?



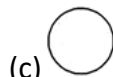
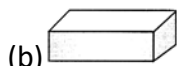
2. (a)

3. Which is a triangle?



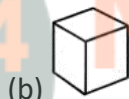
3. (c)

4. Which shape is a circle?



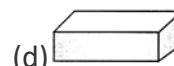
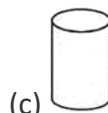
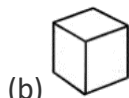
4. (c)

5. Which shape is a cylinder?



5. (c)

6. Which is a cube?



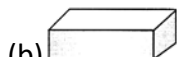
6. (b)

7. Which is a cone?







7. (d)

8. Which is a cuboid?







8. (b)

9. Ram has some dice. Which shape is

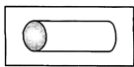
9. (a)  (b)  (c)  (d) 





10. Suraj has some laddus. In which shape are they?
 (a) Circle (b) Sphere (c) Square (d) Cone

11. Ram mother blew some balloons on your birthday. In which shape were they?

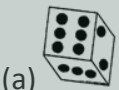
- (a)  (b)  (c)  (d) 

12. What is the shape of the shaded part in the figure?



- (a)  (b)  (c)  (d) 

13. Which of the following looks like a cylinder?



- (a) (b) (c) (d)
13. (c)
- MyClass24
Your Class. Your Pace.




14. How many triangles are there in the figure given?



- (a) 12 (b) 8 (c) 10 (d) 11

15. Match the similar shape



- (a)  (b)  (c)  (d) 