

Numbers from One to Nine

1. Which of the following has 6 objects?



1. (C)

2. Which of the following has the three objects ?



2. (d)

3. Which of the following is 1 more than 4?



3. (a)

4. What is the number name of the greatest one digit number?

(a) One

(b) Zero

(c) Ten

(d) Nine

4. (d)

5. Which of the following is correct?

(a) 7 – Six

(b) 6 - Three

(c) 5 - Five

(d) 9 – Eight

5. (c)

6. Choose the one that is wrong

(a) Four - 4





(b) Seven – 7

(c) Nine - 9

(d) One – 0

6. (d)

7. Which of the following is correct?

(a)		5
(b)		3
(c)		6
(d)		4

7. (a)

8. Which of the following has numbers in an order?

- (a) 4, 2, 6, 0 (b) 3, 5, 7, 9 (c) 7, 9, 2, 3 (d) 9, 4, 6, 8





8. (b)

9. Choose the option with correct order of the numbers.

- (a) 8, 6, 4, 2 (b) 1, 5, 3, 7 (c) 9, 8, 2, 4 (d) 3, 0, 1, 7

9. (a)

10. Match the number of objects to their number names.

	Column – I		Column – II
(P)		(i)	Seven
(Q)		(ii)	Three
(R)		(iii)	Four
(S)		(iv)	Five

(a) (P)-(i), (Q)-(ii), (R)-(iii), (S)-(iv)

(b) (P)-(iv), (Q)-(ii), (R)-(i), (S)-(iii)

(c) (P)-(ii), (Q)-(iv), (R)-(i), (S)-(iii)

(d) (P)-(iii), (Q)-(ii), (R)-(i), (S)-(iv)

10. (c)