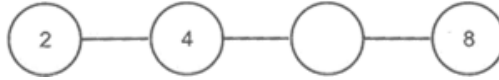


Pattern

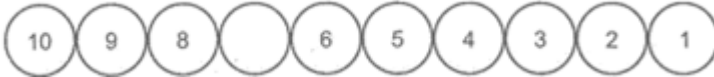
1. What will come in the blank circle?



- (A) 3 (B) 6 (C) 7 (D) 10

1. (B)

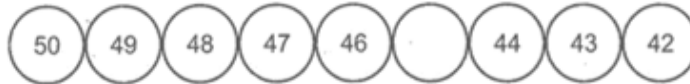
2. Fill in the blank space



- (A) 7 (B) 9 (C) 19 (D) 27

2. (A)

3. Fill in the blank space.



- (A) 45 (B) 33 (C) 41 (D) 40

3. (A)

4. Find the next number in the given series; 2, 5, 8, 11, ?

- (A) 13 (B) 14 (C) 15 (D) 16

4. (B)

5. Complete the number pattern. 2, 4, 6, 8, 10, 12, __, 16, 18

- (A) 13 (B) 14 (C) 15 (D) 17

5. (B)

6. Complete the number pattern. 3, 6, __, 12, 15, 18

- (A) 7 (B) 8 (C) 9 (D) 10

6. (C)

7. 5, 10, __, 20, 25

- (A) 11 (B) 12 (C) 15 (D) 19

7. (C)

8. Look at the pattern. What will be the next shape in the following pattern?



- (A)  (B)  (C)  (D) 

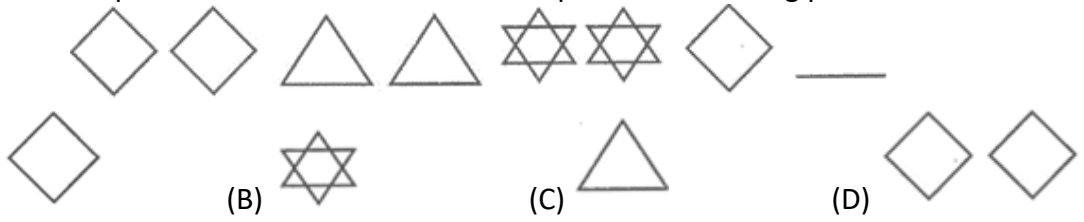
8. (D)

9. Complete the number patterns in following questions. 11, __, 19, 23, 27.

- (A) 12 (B) 14 (C) 15 (D) 18

9. (C)

10. Look at the pattern. What will be the next shape in the following pattern?



10. (A)

