


How Many

1. How many eggs are outside the basket in given figure?




- (a) 4 (b) 7 (c) 3 (d) 6
1. (c)

2. How many object inside the box of the given figure?




- (a) 2 (b) 4 (c) 3 (d) 5
2. (a)

3. How many dustbin/s in the given picture?



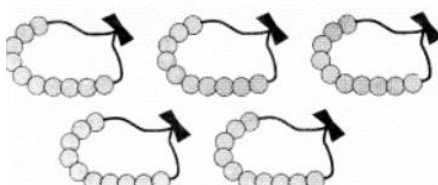
- (a) 1 (b) 2 (c) 3 (d) 4
3. (a)

4. How many sticks in the given picture




- (a) 6 (b) 8 (c) 9 (d) 4
4. (b)

5. How many beads in the given figure?



- (a) 20 (b) 40 (c) 50 (d) 60
5. (c)

6. Which is the bigger number in the given figure



(a) 13

(b) 26

(c) 24

(d) 15

6. (b)

7. How many bananas in the given figure



(a) 10

(b) 11

(c) 9

(d) 12

7. 11



Myclass24
Your Class. Your Pace.