

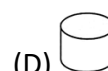
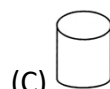
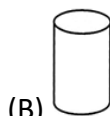
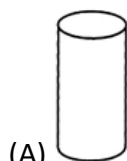
Measurements

1. Which ribbon is the shortest?



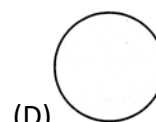
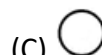
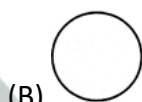
1. (D)

2. Which of the following is the tallest?




2. (A)

3. Which is the smallest circle?



3. (C)

4. Who is closer to the finish line?



(A) Raj

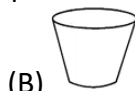
(B) Bhanu

(C) Lateef

(D) Chand

4. (A)

5. Which tub is the deepest?







5. (B)

6. Which tree is taller than X?



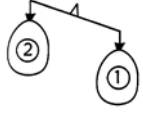
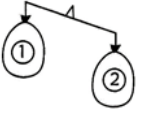
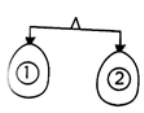
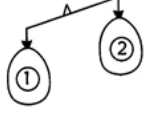
(X)

6. (A)  (B)  (C)  (D) 





7. Which kite has a shorter tail than that of Q?

- (A)  (B)  (C)  (D) All are same





8. Which of the following shows that balloon 1 is lighter than balloon 2?

- (A)  (B)  (C)  (D) 

9. Which is heavier than the animal given in the box?

- (A)  (B)  (C)  (D) 

10. Which of the following is the lightest?

- (A)  (B)  (C)  (D) 

11. What is the distance between the two cars?

- (A) 6 foot spans (B) 8 foot spans (C) 9 foot spans (D) 7 foot spans

