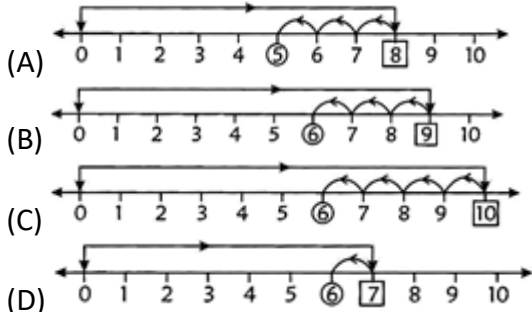


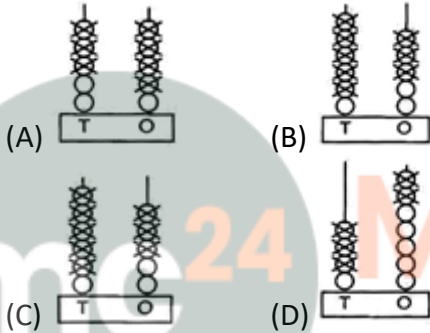
Subtraction

1. What is 4 tens 3 ones minus 2 tens 2 ones?
 (A) 21 (B) 12 (C) 23 (D) 13

2. Which number line shows $9 - 3 = 6$?

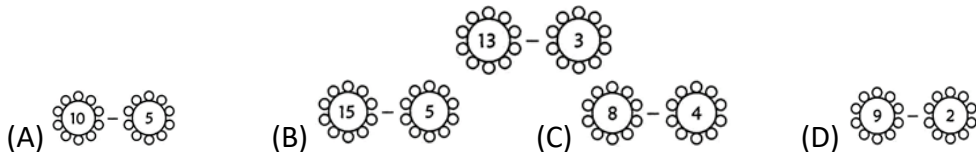


2. ((b))
3. Which abacus shows $47 - 32 = 15$?

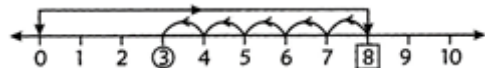


3. (D)
4. How is 12 less than 30 written?
 (A) $30 - 12 = 18$ (B) $30 - 18 = 12$ (C) $18 - 12 = 6$ (D) $30 - 6 = 24$

5. Which is the same as







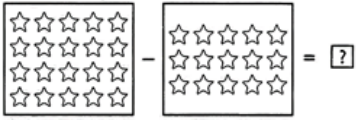
5. (B)
6. Which subtraction fact does the number line show?



6. (C)
7. This is Shyam working, which is wrong.

$$\text{78} - \text{34} = \text{54}$$

What is the correct difference?

7. (A)  (B)  (C)  (D) 
8. Dev had 69 marbles. He gave Kiran 35 marbles. How many marbles are left with Dev?
 (A) 34 (B) 45 (C) 49 (D) 36
8. (A)
9. Which number should be placed in the box?
- 
- (A) 6 (B) 7 (C) 5 (D) 12
9. (C)
10. A book has 55 pages. Ram reads 40 pages. How many pages are left to be read?
 (A) 20 (B) 15 (C) 25 (D) 45
10. (B)



Myclass24
 Your Class. Your Pace.