

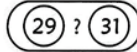
### Numbers from Ten to Fifty

1. What comes before 39?



- (A) 40                      (B) 39                      (C) 28                      (D) 38
1. (D)

2. Which number is in between 29 and 31?



- (A) 20                      (B) 32                      (C) 30                      (D) 28
2. (C)

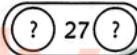
3. How many tens is forty?

- (A) 3                      (B) 2                      (C) 4                      (D) 5
3. (C)

4. Which number comes after 35?

- (A) Thirty six              (B) Thirty four              (C) Thirty seven              (D) Thirty
4. (A)

5. Between which two numbers is 27?



- (A) 24 and 25              (B) 36 and 38              (C) 26 and 28              (D) 46 and 48
5. (C)

6. Which of the following is matched correctly?

- (A)
- (B)
- (C)
- (D)

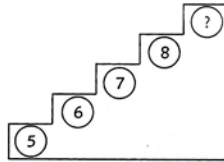
6. (D)

7. Which is the smallest?

- (A) 2 tens                      (B) 2 tens 5 ones              (C) 3 tens                      (D) 2 tens 3 ones
7. (A)

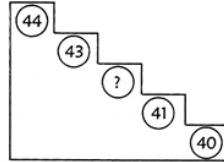
2 tens = 20  
 2 tens 5 ones = 25  
 2 tens 3 ones = 23  
 3 tens = 30  
 So, 2 tens is the smallest.

8. Which number is missing in the following ascending order?




8. (A) 9 (B) 7 (C) 10 (D) 15

9. Find the missing number, in the following descending order.



9. (A) 40 (B) 45 (C) 42 (D) 39

10. What are the next two numbers in the given pattern?



10. (A) 40 and 44 (B) 44 and 48 (C) 46 and 48 (D) 44 and 46

11. Find the missing numbers.



11. (C)

12. What is 4 tens 6 ones?

12. (A) 64 (B) 406 (C) 46 (D) 604