

Addition

1. $6 + 8 = ?$
(A) 14 (B) 13 (C) 18 (D) 12

1. (a)

2. Add the numbers given inside the box:



- (A) 7 (B) 8 (C) 10 (D) 9
2. (d)

3. Ram adds the numbers 2, 1 and 4. What is the final result of this addition?

- (A) 7 (B) 8 (C) 9 (D) 5
3. (a)

4. $1 + 4 + 8 = ?$

- (A) 12 (B) 13 (C) 15 (D) 16
4. (b)


5. Add Rs.3 and Rs.6

- (A) 9 rupees (B) 8 rupees (C) 4 rupees (D) 3 rupees
5. (a)


6. 1 Banana + 2 Bananas + 4 Bananas = ?

- (A) 124 Bananas (B) 25 Bananas (C) 35 bananas (D) 7 bananas
6. (d)




7. Ricky adds the eggs kept in the two boxes and put this addition in a single box. What is the result of this addition?



Box (i)



Box (ii)



7. (c)

8. Sachin buys 1 dozen eggs, James buys 9 eggs and Ricky buys 2 dozen eggs. How many eggs are bought by all the three people together?

8. (A) 40 eggs (B) 42 eggs (C) 44 eggs (D) 45 eggs
(d)
9. Rina has 17 dolls and Serena has 15 dolls. Lina buys 18 more dolls. How many dolls they have in all?
(A) 45 dolls (B) 48 dolls (C) 50 dolls (D) 80 dolls
(c)
10. $6 + 7 + 4 = ?$
(a) 20 (b) 67 (c) 74 (d) 18
10. (a)



Myclass24
Your Class. Your Pace.